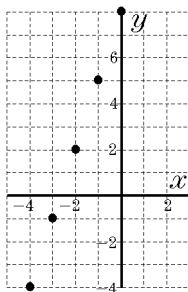
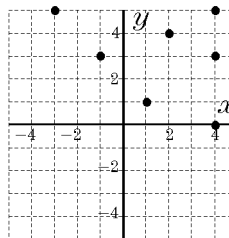


Math 10
Domain and Range

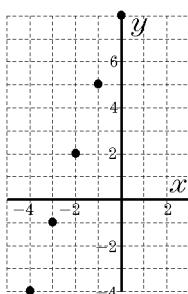
1. State the domain of the function.



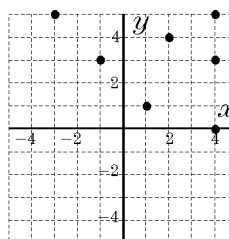
2. State the domain of the function.



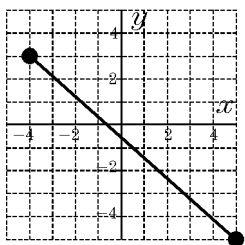
3. State the range of the function.



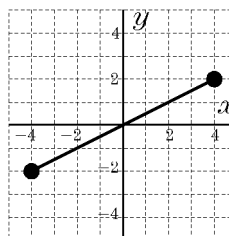
4. State the range of the function.



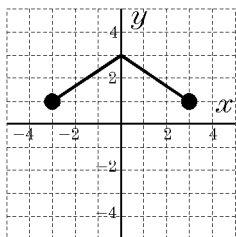
5. State the domain of the function.



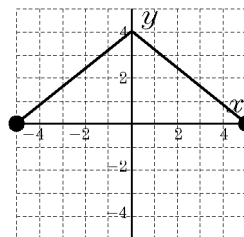
6. State the domain of the function.



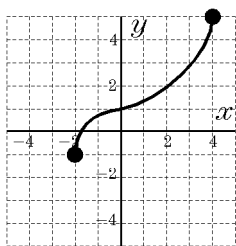
7. What is the domain of the function shown?



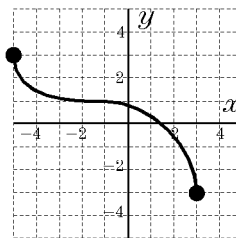
8. State the domain of the function.



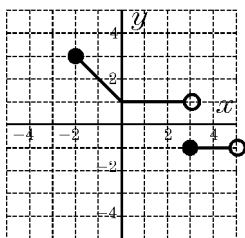
9. What is the domain of the function shown?



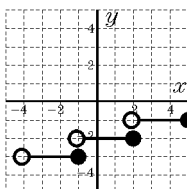
10. What is the domain of the function shown?



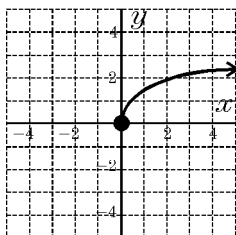
11. What is the domain of the function shown?



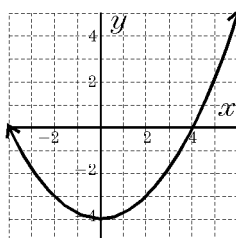
12. What is the domain of the function shown?



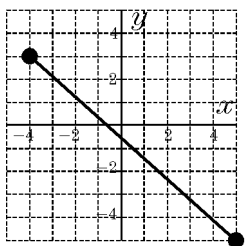
13. What is the domain of the function shown?



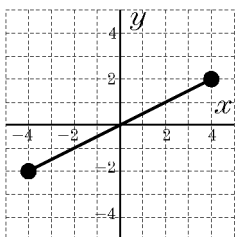
14. State the domain of the function.



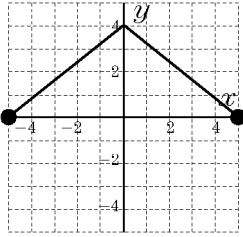
15. State the range of the function.



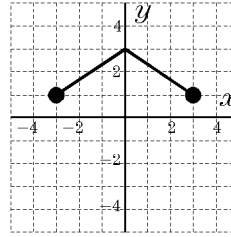
16. State the range of the function.



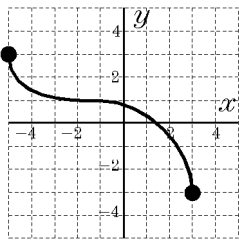
17. State the range of the function.



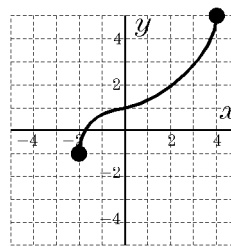
18. What is the range of the function shown?



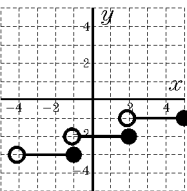
19. What is the range of the function shown?



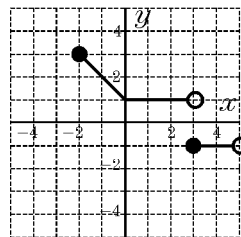
20. What is the range of the function shown?



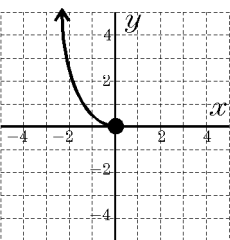
21. What is the range of the function shown?



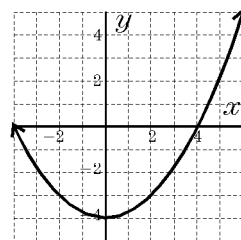
22. What is the range of the function shown?



23. What is the range of the function shown?



24. State the range of the function.



Answer List

- | | | |
|--------------------------------|--------------------------|----------------------------|
| 1. $\{-4, -3, -2, -1, 0\}$ | 2. $\{-3, -1, 1, 2, 4\}$ | 3. $\{-4, -3, -2, -1, 0\}$ |
| 4. $\{0, 1, 3, 4, 5\}$ | 5. $-4 \leq x \leq 5$ | 6. $-4 \leq x \leq 4$ |
| 7. $-3 \leq x \leq 3$ | 8. $-5 \leq x \leq 5$ | 9. $-2 \leq x \leq 4$ |
| 10. $-5 \leq x \leq 3$ | 11. $-2 \leq x < 5$ | 12. $-4 < x \leq 5$ |
| 13. $x \geq 0$ | 14. $x \in \mathbb{R}$ | 15. $-5 \leq y \leq 3$ |
| 16. $-2 \leq y \leq 2$ | 17. $0 \leq y \leq 4$ | 18. $1 \leq y \leq 3$ |
| 19. $-3 \leq y \leq 3$ | 20. $-1 \leq y \leq 5$ | 21. $-1, -2, -3$ |
| 22. -1 and $1 \leq y \leq 3$ | 23. $y \geq 0$ | 24. $y \geq -4$ |

Catalog List

- | | | |
|---------------|---------------|---------------|
| 1. AW1 EB 29 | 2. AW1 EB 30 | 3. AW1 EB 31 |
| 4. AW1 EB 32 | 5. AW1 EB 33 | 6. AW1 EB 34 |
| 7. AW1 EB 35 | 8. AW1 EB 36 | 9. AW1 EB 37 |
| 10. AW1 EB 38 | 11. AW1 EB 39 | 12. AW1 EB 40 |
| 13. AW1 EB 41 | 14. AW1 EB 42 | 15. AW1 EB 43 |
| 16. AW1 EB 44 | 17. AW1 EB 45 | 18. AW1 EB 46 |
| 19. AW1 EB 47 | 20. AW1 EB 48 | 21. AW1 EB 49 |
| 22. AW1 EB 50 | 23. AW1 EB 51 | 24. AW1 EB 52 |