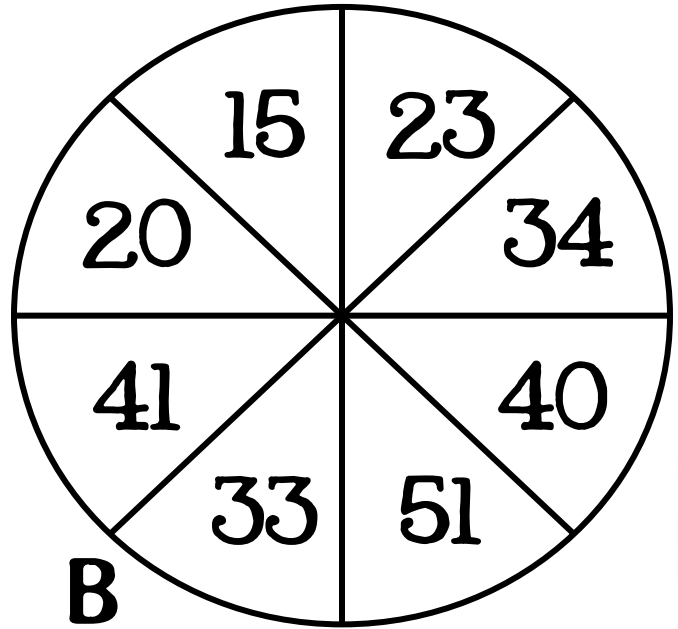
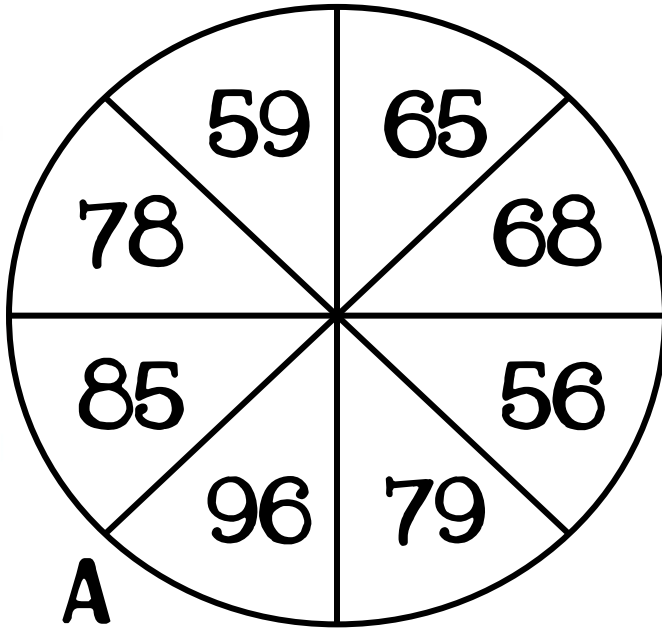
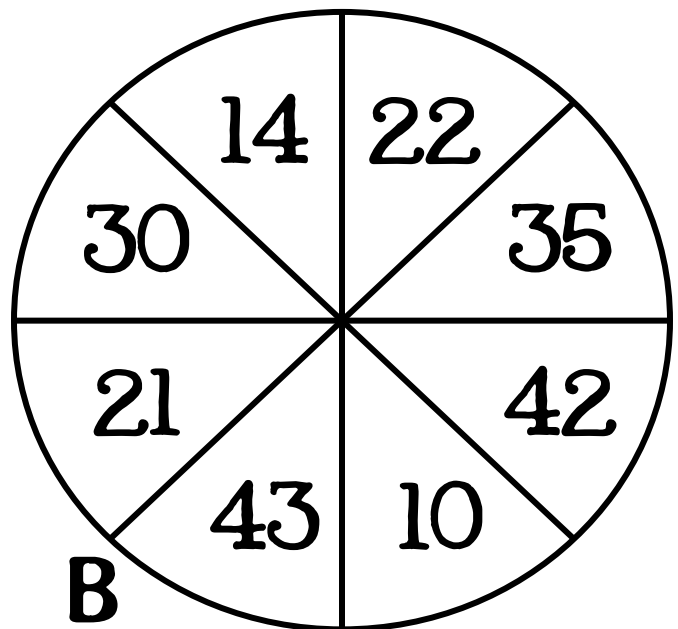
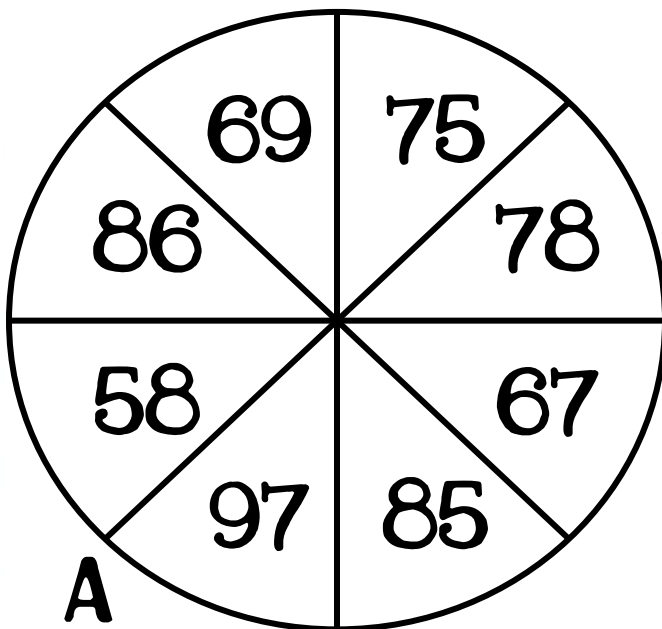


2 digit subtraction spinners



2 digit subtraction spinners



name(s) _____

directions:

using a paper clip and pencil, spin both spinners. record the larger number (spinner A) on top and record the smaller number (B) on the bottom. subtract & solve!

$$\begin{array}{r} \square \square \\ - \square \square \\ \hline \square \square \end{array}$$

$$\begin{array}{r} \square \square \\ - \square \square \\ \hline \square \square \end{array}$$

$$\begin{array}{r} \square \square \\ - \square \square \\ \hline \square \square \end{array}$$

$$\begin{array}{r} \square \square \\ - \square \square \\ \hline \square \square \end{array}$$

$$\begin{array}{r} \square \square \\ - \square \square \\ \hline \square \square \end{array}$$

$$\begin{array}{r} \square \square \\ - \square \square \\ \hline \square \square \end{array}$$

$$\begin{array}{r} \square \square \\ - \square \square \\ \hline \square \square \end{array}$$

$$\begin{array}{r} \square \square \\ - \square \square \\ \hline \square \square \end{array}$$

$$\begin{array}{r} \square \square \\ - \square \square \\ \hline \square \square \end{array}$$