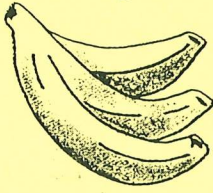



Complete.



How many groups? _____

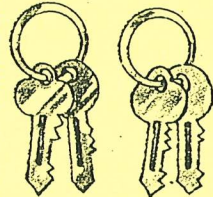


How many in each group? _____

How many bananas? _____

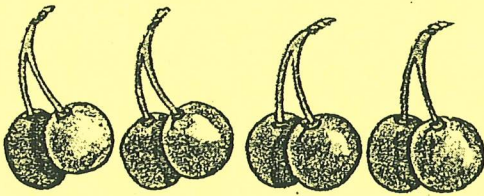


How many groups? _____



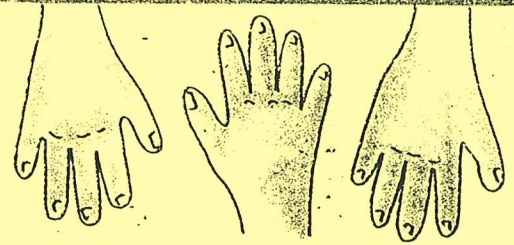
How many in each group? _____

How many keys? _____



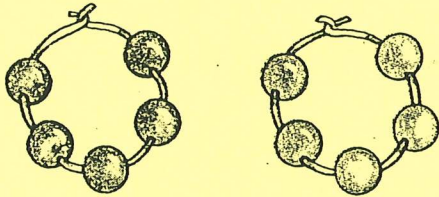
$$2 + 2 + 2 + 2 = \underline{\hspace{2cm}}$$

4 groups of 2 equals _____

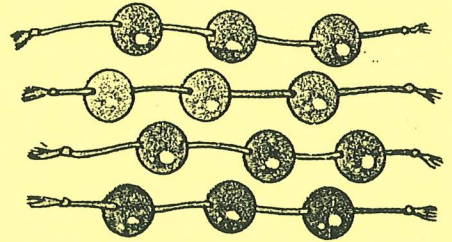


$$5 + 5 + 5 = \underline{\hspace{2cm}}$$

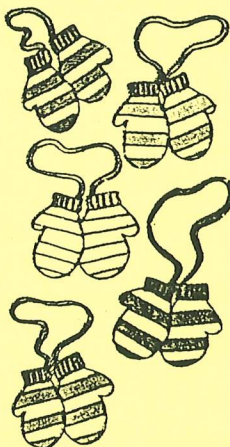
3 groups of 5 equals _____



$$2 \times 5 = \underline{\hspace{2cm}}$$



$$4 \times 3 = \underline{\hspace{2cm}}$$



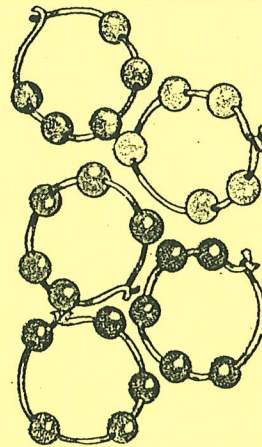
$$2 \times 2 = \underline{\hspace{2cm}}$$

$$4 \times 2 = \underline{\hspace{2cm}}$$

$$1 \times 2 = \underline{\hspace{2cm}}$$

$$3 \times 2 = \underline{\hspace{2cm}}$$

$$5 \times 2 = \underline{\hspace{2cm}}$$



$$2 \times 5 = \underline{\hspace{2cm}}$$

$$5 \times 5 = \underline{\hspace{2cm}}$$

$$1 \times 5 = \underline{\hspace{2cm}}$$

$$3 \times 5 = \underline{\hspace{2cm}}$$

$$4 \times 5 = \underline{\hspace{2cm}}$$