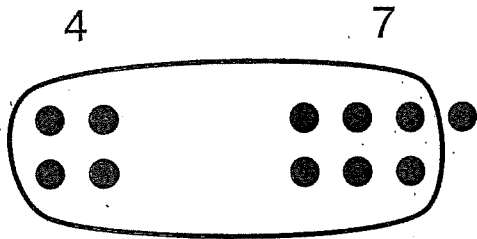




- Circle a group of 10.
- Use 10 to add.




$$4 + 7 = 10 + \underline{1} = \underline{11}$$




$$8 + 6 = 10 + \underline{\quad} = \underline{\quad}$$



$$9 + 4 = 10 + \underline{\quad} = \underline{\quad}$$



$$9 + 2 = 10 + \underline{\quad} = \underline{\quad}$$



$$7 + 7 = 10 + \underline{\quad} = \underline{\quad}$$

Make your own.