

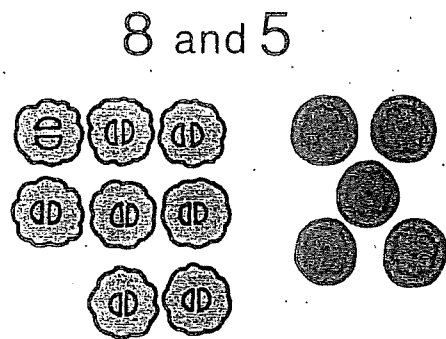
THAT'S THE SAME
AS $10 + 2$

7 AND 5

Give the missing numbers.


THAT'S THE SAME
AS 10 AND 3

$8 + 5 = 10 + \square$




THAT'S THE SAME
AS 10 AND \square

$9 + 6 = 10 + \square$



THAT'S THE SAME
AS 10 AND \square

$7 + 4 = 10 + \square$



Solve the equations.

$$8 + 5 = \square$$

$$9 + 6 = \square$$

$$7 + 4 = \square$$