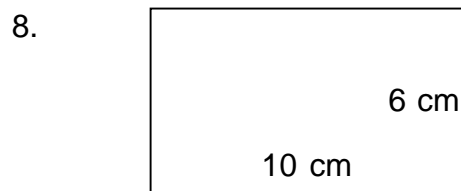

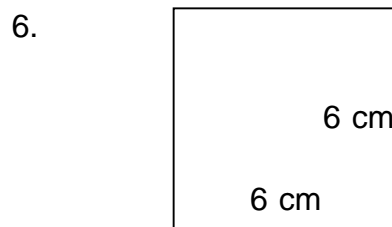

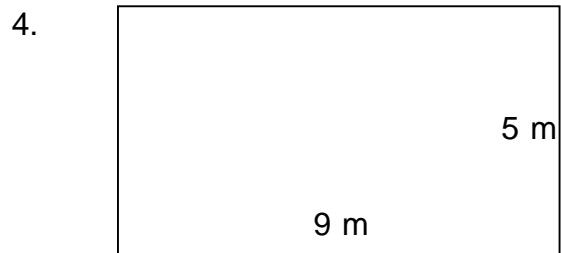



## Perimeter and area of rectangles

---

### Grade 3 Geometry Worksheet

Find the perimeter and area of each rectangle.



## Perimeter and area of rectangles

---


### Grade 3 Geometry Worksheet

Find the perimeter and area of each rectangle.



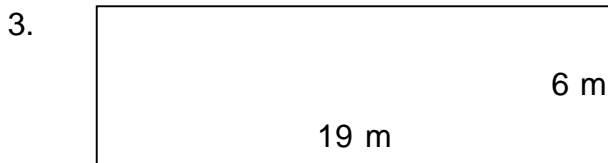
$P = 56 \text{ m}$   $A = 147 \text{ m}^2$

---



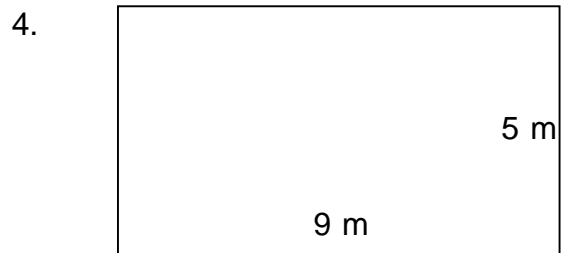
$P = 52 \text{ m}$   $A = 144 \text{ m}^2$

---




$P = 50 \text{ m}$   $A = 114 \text{ m}^2$

---



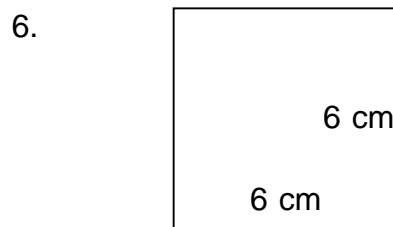
$P = 28 \text{ m}$   $A = 45 \text{ m}^2$

---




$P = 46 \text{ m}$   $A = 76 \text{ m}^2$

---



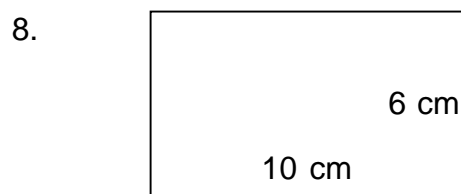
$P = 24 \text{ cm}$   $A = 36 \text{ cm}^2$

---



$P = 36 \text{ m}$   $A = 56 \text{ m}^2$

---



$P = 32 \text{ cm}$   $A = 60 \text{ cm}^2$

---