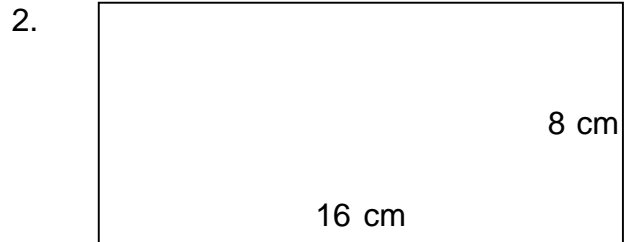



Perimeter and area of rectangles

Grade 3 Geometry Worksheet

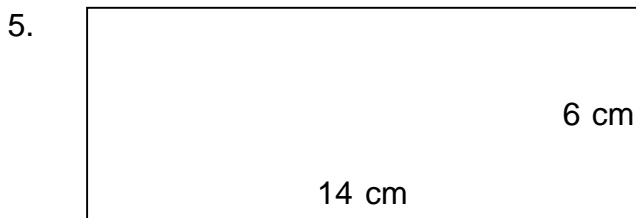
Find the perimeter and area of each rectangle.






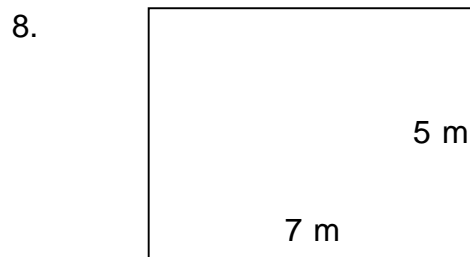












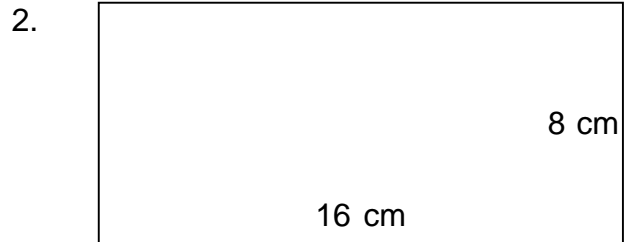
Perimeter and area of rectangles

Grade 3 Geometry Worksheet


Find the perimeter and area of each rectangle.



$P = 28 \text{ m}$ $A = 40 \text{ m}^2$



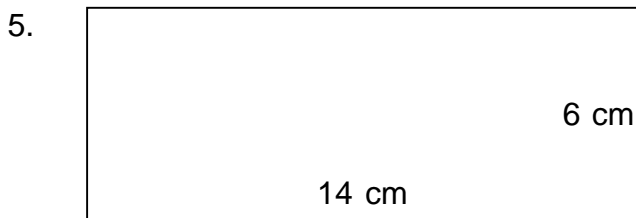
$P = 48 \text{ cm}$ $A = 128 \text{ cm}^2$



$P = 38 \text{ m}$ $A = 60 \text{ m}^2$



$P = 32 \text{ cm}$ $A = 55 \text{ cm}^2$



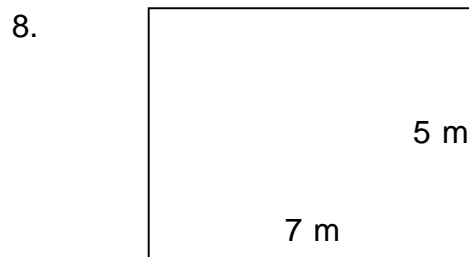
$P = 40 \text{ cm}$ $A = 84 \text{ cm}^2$



$P = 32 \text{ cm}$ $A = 64 \text{ cm}^2$



$P = 40 \text{ cm}$ $A = 64 \text{ cm}^2$



$P = 24 \text{ m}$ $A = 35 \text{ m}^2$
