














ME3-4: Measuring Centimetres with Rulers





1. Measure the length of each line using your ruler.

- a)  _____ cm b) 
- c)  _____ cm d) 
- e) 
- f) 
- g) 
- h) 
- i) 

2. Measure the length of each object.

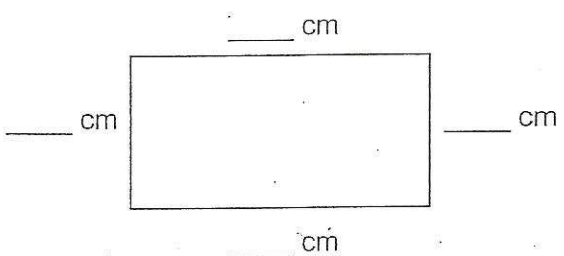
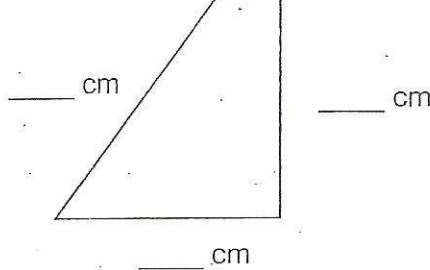
- a)  _____ cm b) 
- c)  _____ cm d) 

3. Measure the distance between the two points using your ruler.

- a)  _____ cm b)  _____ cm
- c)  _____ cm d)  _____ cm

BONUS

4. Measure all the sides of each shape.

- a)  _____ cm
- b)  _____ cm

5. Measure the length of several objects on your desk (rulers, pencils, erasers, etc.)