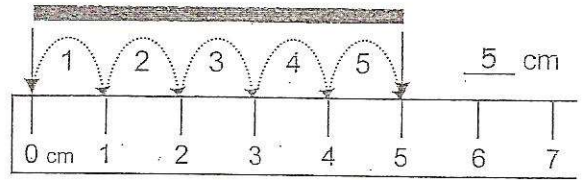
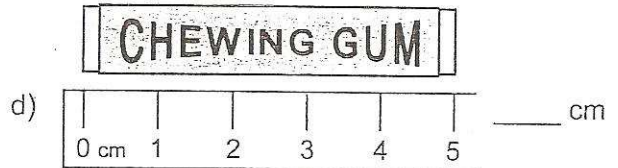
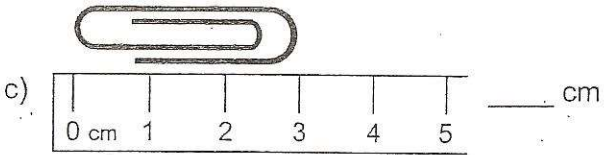
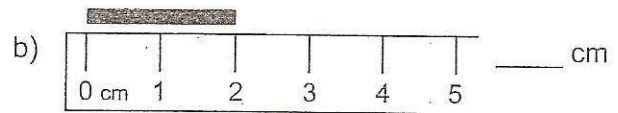
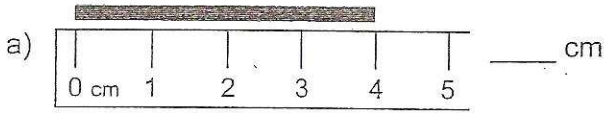


Laura measures the line by lining up her ruler with the endpoint of the line.

She counts the number of centimetre "hops" it takes to reach to the end of the line.



1. Measure the length of each line or object.



2. Measure the length of the lines and objects below.

BE CAREFUL: The centimetre marks on these rulers are not numbered.

