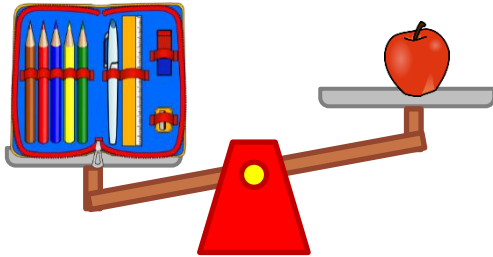


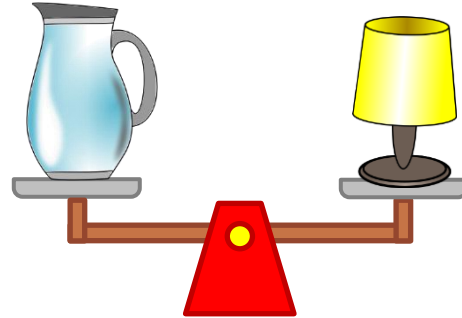
Heavier / lighter with a balance scale

Grade 2 Measurement Worksheet

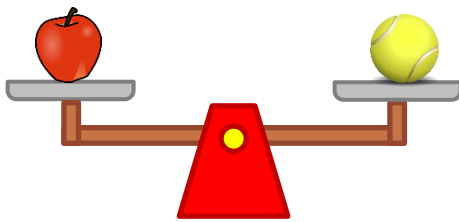
Look at the following scales and fill in the blanks with “**heavier than**”, “**lighter than**” or “**the same as**”.



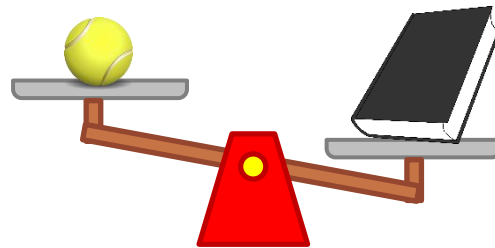
The pencil case weighs _____ the apple.



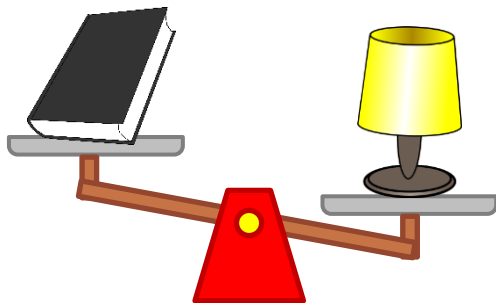
The pitcher weighs _____ the lamp.




The tennis ball weighs _____ the apple.



The tennis ball weighs _____ the book.



The lamp weighs _____ the book.



The pencil case weighs _____ the book.

Which one is heavier: pitcher or pencil case?

Which one is lighter: book or apple?

Answers

The pencil case weighs heavier than the apple.

The pitcher weighs the same as the lamp.

The tennis ball weighs the same as the apple.

The tennis ball weighs lighter than the book.

The lamp weighs heavier than the book.

The pencil case weighs lighter than the book.

Which one is heavier: pitcher or pencil case?

Pitcher

Which one is lighter: book or apple?

Apple