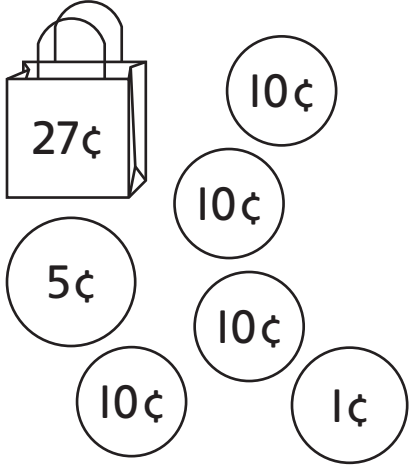
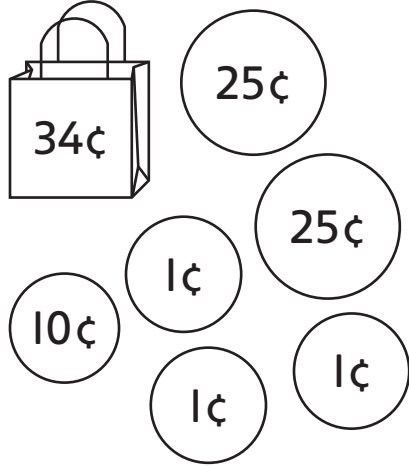





- ☐ Braden adds coins to his bag.  
How much money does he have now?




$$\begin{array}{r} 27 \text{ ¢} \\ + \square \text{ ¢} \\ \hline \square \text{ ¢} \end{array}$$


$$\begin{array}{r} 34 \text{ ¢} \\ + \square \text{ ¢} \\ \hline \square \text{ ¢} \end{array}$$


$$\begin{array}{r} 16 \text{ ¢} \\ + \square \text{ ¢} \\ \hline \square \text{ ¢} \end{array}$$


$$\begin{array}{r} 52 \text{ ¢} \\ + \square \text{ ¢} \\ \hline \square \text{ ¢} \end{array}$$


$$\begin{array}{r} 24 \text{ ¢} \\ + \square \text{ ¢} \\ \hline \square \text{ ¢} \end{array}$$


$$\begin{array}{r} 28 \text{ ¢} \\ + \square \text{ ¢} \\ \hline \square \text{ ¢} \end{array}$$