



A cow has 4 legs.


How many legs do 2 cows have?




How many legs do 3 cows have?



How many legs do 4 cows have?



How many legs do 5 cows have?



How many legs do 6 cows have?

