

Name: _____

Which Weighs More?



Directions: Place one object on each side of the balance. Circle the object that weighs more.




or



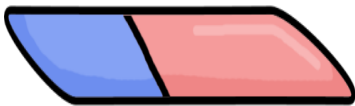
or



or



or



or



or

