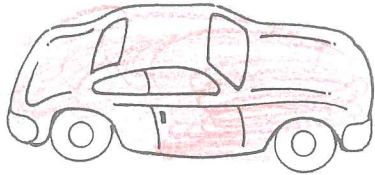


Name: Aeda Matthew Date: A 10/1


Line Master 2

# Compare the Distance

Car A



Car C



Car B



Which car travelled the longest distance? Car blue

Which car travelled the shortest distance? Car pink

Order the distances from longest to shortest.

Car blue

Car orange


Car pink

Name: John and sister Troy Date: \_\_\_\_\_


Line Master 2

# Compare the Distance


Car A



Car C



Car B



Which car travelled the longest distance? Car                     

Which car travelled the shortest distance? Car                     

Order the distances from longest to shortest.


Car                           Car                           Car

Name: Ella Nicholas Rapp Date: \_\_\_\_\_

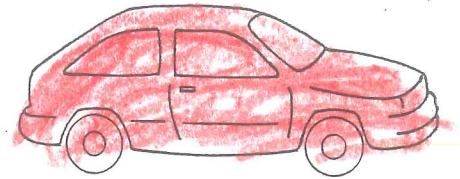
Line Master 2

# Compare the Distance


Car A




Car C



Car B



Which car travelled the longest distance? Car           



Which car travelled the shortest distance? Car           

Order the distances from longest to shortest.

Car           

Car           


Car

Name: OWEN AND EVIE Date: \_\_\_\_\_


Line Master 2

# Compare the Distance


Car A



Car C



Car B



Which car travelled the longest distance? Car           

Which car travelled the shortest distance? Car           

Order the distances from longest to shortest.


Car                 Car                 Car

Name: Amelia MARASCARL Date: ETT


Line Master 2

# Compare the Distance


Car A



Car C



Car B



Which car travelled the longest distance? Car Car A

Which car travelled the shortest distance? Car Car B

Order the distances from longest to shortest.


Car Car A      Car Car C      Car Car B

Name: Ava ASP en EVA Date: \_\_\_\_\_


Line Master 2

# Compare the Distance


Car A



Car C



Car B



Which car travelled the longest distance? Car Car B

Which car travelled the shortest distance? Car Car A

Order the distances from longest to shortest.

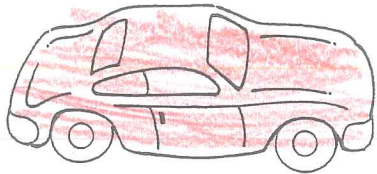
Car Car B      Car Car C      Car Car A

Name: LUCA ASHIB Date: SIENA Unit 4: Measurement

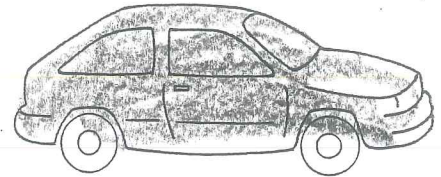
Line Master 2

# Compare the Distance

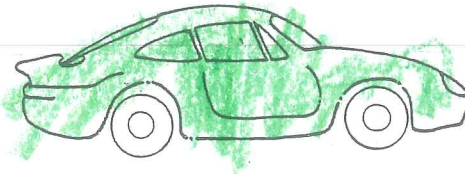
Car A



Car C



Car B



Which car travelled the longest distance? Car           

Which car travelled the shortest distance? Car           

Order the distances from longest to shortest.

Car           

Car           

Car