





# Naming Shapes


Study online at [https://quizlet.com/\\_a22c80](https://quizlet.com/_a22c80)



15. **Equilateral triangle:** 3 edges of equal length



16. **Circle:**







# Naming Shapes

Study online at [https://quizlet.com/\\_a22c80](https://quizlet.com/_a22c80)


7. **Square:** 4 edges of equal length and 4 equal angles



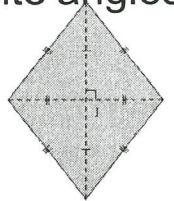
8. **Rectangle:** 2 sets of opposite edges of equal length and 4 equal



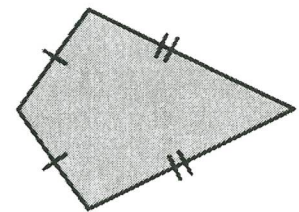
9. **Trapezoid:** 4 edges, 2 that are parallel




10. **Rhombus:** 4 edges of equal length and 2 set sets of equal and opposite angles



11. **Kite:** 4 edges, 2 sets of adjacent edges of equal length



12. **Right triangle:** 3 sides with a  $90^\circ$  angle



13. **Scalene triangle:** 3 edges of different length



14. **Isosceles triangle:** 3 edges, two of equal length