
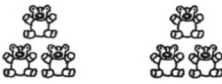



Multiplication - Facts 1-5

A. Write a multiplication sentence for each picture.




<p>1. </p> <p>_____</p>	<p>2. </p> <p>_____</p>	<p>3. </p> <p>_____</p>
--	--	--

B. Multiply.

4. $2 \times 5 =$	5. $10 \times 1 =$	6. $4 \times 4 =$
7. $9 \times 3 =$	8. $3 \times 4 =$	9. $10 \times 3 =$
10. $7 \times 4 =$	11. $1 \times 1 =$	12. $9 \times 5 =$
13. $3 \times 1 =$	14. $5 \times 3 =$	15. $8 \times 2 =$
16. $6 \times 4 =$	17. $7 \times 5 =$	18. $8 \times 4 =$
19. $4 \times 2 =$	20. $6 \times 2 =$	21. $3 \times 3 =$
22. $8 \times 5 =$	23. $5 \times 5 =$	24. $6 \times 1 =$
25. $10 \times 5 =$	26. $4 \times 3 =$	27. $2 \times 2 =$
28. $3 \times 5 =$	29. $2 \times 1 =$	30. $5 \times 5 =$

Multiplication - Facts 6-10

A. Write a multiplication sentence for each picture.

1. 	2. 	3. 
<hr/>	<hr/>	<hr/>

B. Multiply.

4. $2 \times 6 =$	5. $4 \times 9 =$	6. $10 \times 8 =$
7. $9 \times 7 =$	8. $10 \times 9 =$	9. $3 \times 6 =$
10. $7 \times 9 =$	11. $9 \times 6 =$	12. $1 \times 10 =$
13. $3 \times 10 =$	14. $8 \times 9 =$	15. $5 \times 7 =$
16. $6 \times 8 =$	17. $7 \times 8 =$	18. $7 \times 6 =$
19. $4 \times 7 =$	20. $3 \times 9 =$	21. $6 \times 10 =$
22. $8 \times 8 =$	23. $6 \times 6 =$	24. $5 \times 9 =$
25. $10 \times 7 =$	26. $2 \times 8 =$	27. $4 \times 10 =$
28. $7 \times 7 =$	29. $6 \times 7 =$	30. $10 \times 9 =$