



Name _____

Greater Than & Less Than




Directions: Compare the numbers by using a $>$, $<$, or $=$

2




0

4




2

8




9

2




5

9




0

3




7

1




5

7




9

1




1

2




2

5




6

9




4

4



8


2



1

Name _____

Greater Than & Less Than



Directions: Compare the numbers by using a $>$, $<$, or $=$

$2 \bigcirc 0$ $2 \bigcirc 14$

$8 \bigcirc 19$ $20 \bigcirc 20$

$9 \bigcirc 0$ $3 \bigcirc 7$

$10 \bigcirc 11$ $17 \bigcirc 19$


$1 \bigcirc 1$ $12 \bigcirc 12$

$5 \bigcirc 6$ $19 \bigcirc 14$

$4 \bigcirc 8$ $2 \bigcirc 20$

Name _____

Greater Than & Less Than




Directions: Write numbers in the blanks to make it a true $>$, $<$, or $=$ sentence.

<u>9</u> $>$ <u>4</u>	_____ $<$ _____
_____ $=$ _____	_____ $>$ _____
_____ $>$ _____	_____ $<$ _____
_____ $<$ _____	_____ $=$ _____
_____ $<$ _____	_____ $>$ _____

Name _____


Greater Than & Less Than



Directions: Read each greater than & less than sentence. If it's true, color in the box with the T. If it's false, color in the box with the F.

$2 < 3$	T F	$1 > 1$	T F
$4 > 1$	T F	$4 < 6$	T F
$1 = 1$	T F	$3 > 2$	T F
$3 > 5$	T F	$0 < 4$	T F
$7 < 2$	T F	$8 = 8$	T F

Name _____



Make your Own < > = Problems!

Directions: Make your own greater than and less than problems by writing the numbers and symbols (< > =) below.

_____ ○ _____	_____ ○ _____
_____ ○ _____	_____ ○ _____
_____ ○ _____	_____ ○ _____
_____ ○ _____	_____ ○ _____
_____ ○ _____	_____ ○ _____