

1 Kim has five one dollar coins. Does she have enough to buy one box of fries if they cost \$2?

2 Chet has two five dollar bills. Can he buy two slices of pizza if they cost \$3 each?



3 Amy has four quarters. Can she buy a soda that costs \$1?

4 Cupcakes cost \$1 each. Can Zack buy a dozen of them with two five dollar bills?




5 Mom wants to buy 3 bags of popcorn that cost \$3 each. Is a \$10 bill enough to pay for the popcorn?

6 Giant lollipops cost \$1. How many can Mike buy if he has three one dollar coins?



7 Hot dogs cost \$2 each. How many can Sara buy with a \$5 bill?

8 Juice boxes cost \$1 each. Can Nick buy two of them with seven quarters?






9

Sandwiches cost \$3. Can Kate buy two of them with five one dollar coins?

Chad is really thirsty. Lemonade costs \$2. How many cups can he buy with \$5?



10



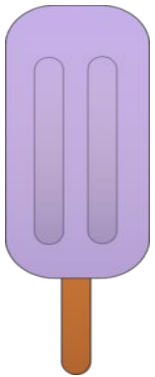
11

A hamburger costs \$2. Dad needs to buy 6 of them. How much will the hamburgers cost altogether?

Ben has nine quarters. If an ice cream cone costs \$2, does he have enough money?




12



13

Popsicles cost 75 cents. Can Megan buy one if she has two quarters?

John and his brother both want cotton candy. It costs \$2. Can they both buy some if they have eight quarters?



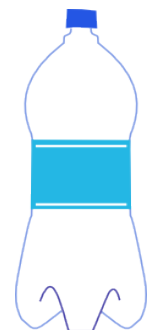
14



15

Emma wants to buy chips that cost \$2 for her five friends. Can she buy 5 bags of chips if she has \$9?

Bottles of water cost \$3. How many can DJ buy with twelve dollars?



16


1



Teddy Bears \$5

Amy wants to buy both her cousins a bear. Can she do this if she has a five dollar bill and three one dollar coins?

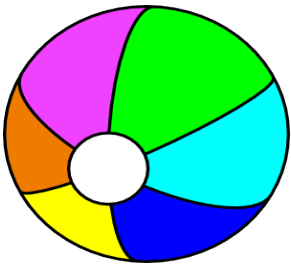
2



Puzzle Cubes \$4

Can Jan buy a puzzle cube with 3 one dollar coins and 4 quarters?


3



Beach Balls \$2

Carter is having a pool party. He wants to buy one beach ball for each guest. If a dozen guests are invited, how much will the balls cost altogether?

4



Remote Control Cars \$17

Rob got a ten dollar bill for taking care of the neighbor's dog and two five dollar bills for his birthday. Can he buy a remote control car?

5



Walkie Talkie Set \$25

Kayla is saving her allowance. She has five two dollar coins and two five dollar bills so far. Does she have enough to buy the walkie talkies today?

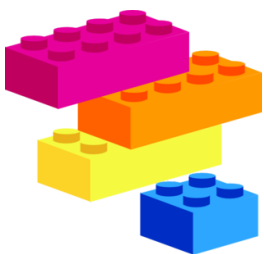
6



Party Favors \$4

Jen is having a birthday party with 8 guests. How much will it cost to buy party favors for all her guests?


7



Building Blocks \$35

Jack got one \$20 bill from his uncle for his birthday. He earned 2 ten dollar bills for good grades. Can he buy the building block set?

8



Talking Robot \$15

Jill and Will each want a talking robot. If Jill has 2 five dollar bills and Will has 5 one dollar coins, do they have enough money to buy two robots?

9



Doll House \$100

Ella is helping her aunt in the garden for ten dollars a week. If Ella wants to buy the doll house, how many weeks will it take her to save enough money?

10

Lana needs a new video game controller. Can she buy one with a ten dollar bill and three one dollar coins?



Video Game Controller \$20

11



Music CDs \$10

Kit wants to buy some music CDs. How many can she buy with 4 five dollar bills?


12

Rick wants a new set of markers. If he saves \$4 a week, how long will it take to save enough money?



Marker Set \$12

13

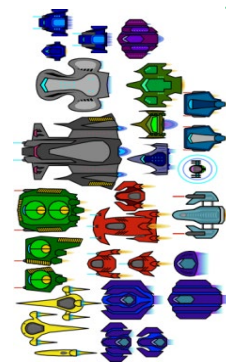


Chess Set \$22

Ben and Jen want to buy a chess set. If they have 1 ten dollar bill, 1 five dollar bill and 3 one dollar coins, can they buy the set?

14

Matt has saved 5 one dollar bills and 2 ten dollar bills. How many Space Flyers can he buy?



Space Flyers \$4 each

15



The Lonely Dragon books \$10 each

Dusty wants to read all four books about the Lonely Dragon. If he saves \$5 a week, how many weeks will it be until he can buy all four books?

16

Cade wants a new bike. He earns \$25 from helping his uncle. His parents give him \$50 for his birthday. Does he have enough to buy the bike?



Bicycle \$100