

Investigating Quadrilaterals

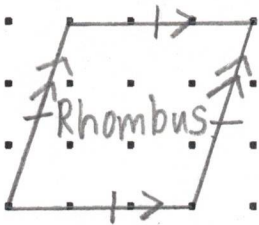
Name: _____




- 4 right angles
- 4 pairs of perpendicular lines
- 2 pairs of parallel lines
- 4 equal sides




- 4 right angles
- 4 pairs of perpendicular lines
- 2 pairs of parallel lines
- 2 pairs of equal sides




- 0 right angles
- 0 pairs of perpendicular lines
- 2 pairs of parallel lines
- 4 equal sides



- 0 right angles
- 0 pairs of perpendicular lines
- 2 pairs of parallel lines
- 2 pairs of equal sides



- 0 right angles
- 0 pairs of perpendicular lines
- 1 pairs of parallel lines
- 0 pairs of equal sides



- 0 right angles
- 0 pairs of perpendicular lines
- 0 pairs of parallel lines
- 2 pairs of equal lines