

1st Grade

Addition

Free
Sample

and

Free
Sample

Subtraction

90
Word
Problems

YOU MAY ALSO LIKE...

Click on each picture to learn more!

**1ST GRADE
WORD PROBLEMS**
ADDITION & SUBTRACTION

90 Differentiated Word Problems

**MATH HOMEWORK
1ST GRADE**
WHOLE YEAR

SPIRAL MATH

100%

**WORD PROBLEM
TASK CARDS**
1ST GRADE
ADDITION & SUBTRACTION

90 Task Cards

**WAYS TO MAKE A NUMBER
CUT & PASTE**
DIFFERENTIATED
NUMBERS 1-20

GUMBALL

**COUNTING TO 120
WORKSHEETS**

Worksheets to Reinforce
Counting from 0-120

- Number Lines
- Counting Objects
- Hundreds Charts

NBT.1

**SHORT VOWEL
READING COMPREHENSION**
3 DIFFERENTIATED
VERSIONS FOR EACH STORY

30 Short Vowel Word Families

CONNECT WITH ME



Facebook



Pinterest



TpT



Blog

THANK YOU

I hope you enjoyed using this product. I really hope you find it useful. I appreciate your purchase and would be more than happy to respond to any questions, concerns, or comments you have regarding this product. If you are not 100% happy with it, please email me via my store on TpT: [Fun and Learning in English and Spanish](#). I'm also on [Pinterest](#).

If you enjoyed this product make sure that you follow me on TpT to get notifications of new products and access to the follower-only freebies via [my TpT store!](#)

TERMS OF USE

Please read the TERMS OF USE. They are SUPER BORING to read, but they're also SUPER IMPORTANT!

Sharing copies of this resource is illegal.

All rights are reserved. This file found on TpT entitles the single the right to reproduce pages for a **single classroom use only**. Please purchase additional licenses if you intend to share this with your team, school, or district. You can buy additional licenses to use at a discount of the original price via [my store on TpT](#). Duplication for a colleague, whole school, whole school system, or commercial purposes is strictly forbidden without written permission from the maker of this resource. Storing this file or any purchased/free file on the internet in any form (even for a personal/classroom website) is strictly forbidden and is a violation of the Digital Millennium Copyright Act (DMCA).

You may not resell this as is or redistribute my original files at all.

Please do not give away any of this resource for free or as a paid or free resource online or elsewhere. Please do not claim this resource as your own.

The purchase of this resource does allow the teacher (or the purchaser) to use this product year after year for personal classroom use only, or by parents with homeschooled children, etc

EARN FREE TpT CREDITS

Please remember to earn your **TPT credits** by providing me **feedback** 😊 - just go to your "My Purchases" on the top, right corner of TpT and [rate your product](#) 😊

CREDITS


A big thanks to the following for allowing me to use their clip art, fonts, paper, and borders:

[Courtney Keimer](#)

<http://www.teacherspayteachers.com/Store/Fun-For-Learning>

www.teacherspayteachers.com/store/Jaime-aguiar

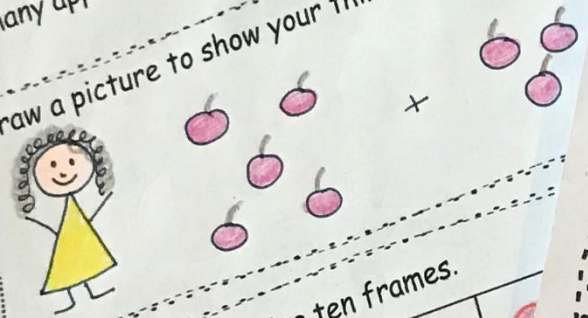
www.teacherspayteachers.com/store/The-Enlightened-Elephant




Name: Isabel Date: _____ Addition result unknown - sums to 10

Ann ate 5 apples. Then she ate 3 more. How many apples did she eat in all?

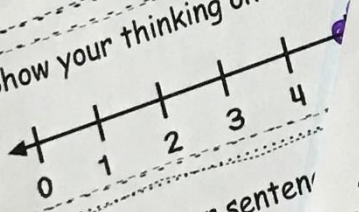
Draw a picture to show your thinking.



Show your work using ten frames.



Show your thinking on the number line.




Write a number sentence.

$$\underline{5} + \underline{3} = \underline{8}$$


Name: Isabel Date: _____ Addition result unknown - sums to 20

Sadie played with her friends. There were 11 girls in the house. Then, 5 more girls joined them. How many girls are playing altogether in Sadie's house?


Draw a picture to show your thinking.



Show your work using ten frames.



Show your thinking on the number line.



Write a number sentence.

$$\underline{11} + \underline{5} = \underline{16}$$

What is your final answer?

16

Table of contents

- 10 Addition result unknown
($8+2=?$) – sums to 10 & 20
- 10 Subtraction result unknown
($8-2=?$) – sums to 10 & 20
- 10 Addition start unknown
($?+2=10$) – sums to 10 & 20
- 10 Addition change unknown
($8+?=10$) – sums to 10 & 20
- 10 Subtraction start unknown
($?-2=6$) – sums to 10 & 20
- 10 Subtraction change unknown
($8-?=6$) – sums to 10 & 20
- 10 Addition of 3 addends – sums to 10 & 20
- 20 Add within 100 (2 digit # and 1 digit – NO regrouping)

All of these are included in my entire packet available at my [TPT store.](#)

Name: _____ Date: _____ Addition result

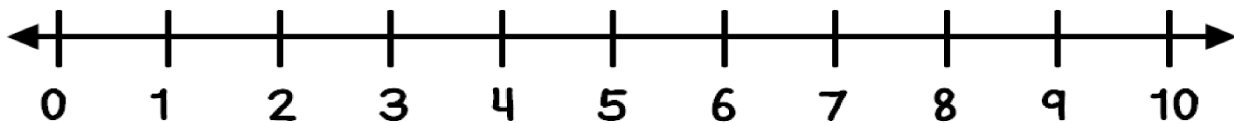
unknown –
sums to 10

Ann ate 5 apples. Then she ate 3 more.
How many apples did she eat in all?

Draw a picture to show your thinking.

Show your work using ten frames.

Show your thinking on the number line.



Write a number sentence.

___ O ___ O ___

What is your final answer?

Name: _____ Date: _____

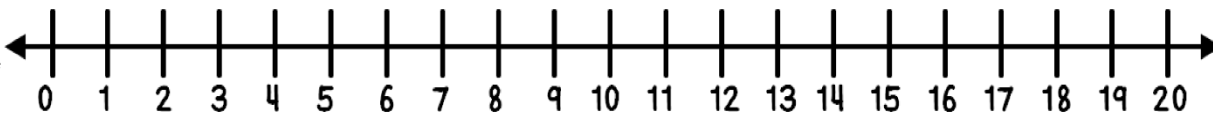
Subtraction
result unknown
– sums to 20

While eating watermelon, I saw 18 seeds. I picked 12 of them out. How many seeds are left?

Draw a picture to show your thinking.

Show your work using ten frames.

Show your thinking on the number line.



Write a number sentence.

___ O ___ O ___

What is your final answer?

Name: _____ Date: _____

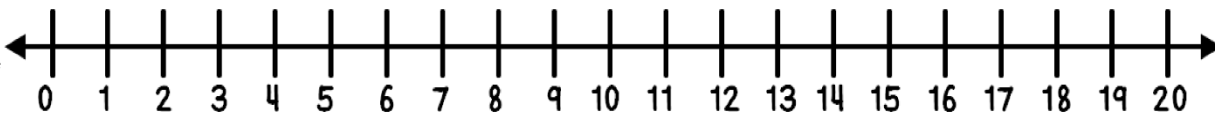
Addition start
unknown –
sums to 20

I saw a few red birds on a tree. Then, 7 blue birds came. Now there are 12 birds on the tree.
How many red birds were on the tree?

Draw a picture to show your thinking.

Show your work using ten frames.

Show your thinking on the number line.



Write a number sentence.

___ O ___ O ___

What is your final answer?

Name: _____ Date: _____

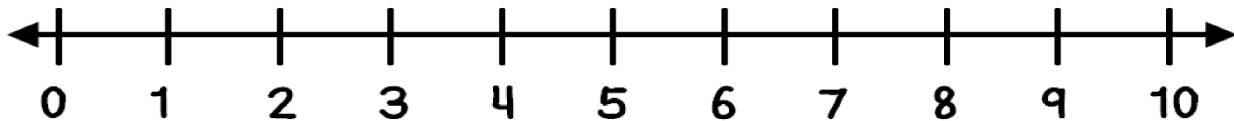
Subtraction
change
unknown –
sums to 10

Baby Jim held 7 balloons in his hand. Some of them flew away. Now he only has 2 balloons. How many balloons flew away?

Draw a picture to show your thinking.

Show your work using ten frames.

Show your thinking on the number line.



Write a number sentence.

___ O ___ O ___

What is your final answer?

Name: _____ Date: _____

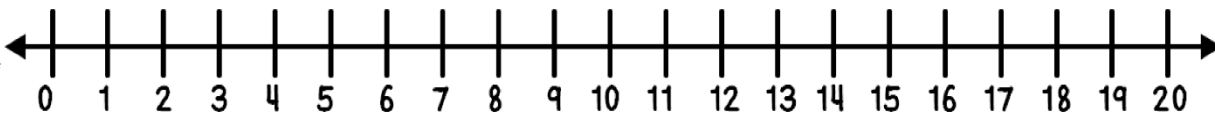
Subtraction
change
unknown –
sums to 20

Gary had 20 grapes on his plate. He tipped it over and now there are only 12 grapes on his plate. How many grapes fell on the floor?

Draw a picture to show your thinking.

Show your work using ten frames.

Show your thinking on the number line.



Write a number sentence.

___ O ___ O ___

What is your final answer?

Name: _____ Date: _____

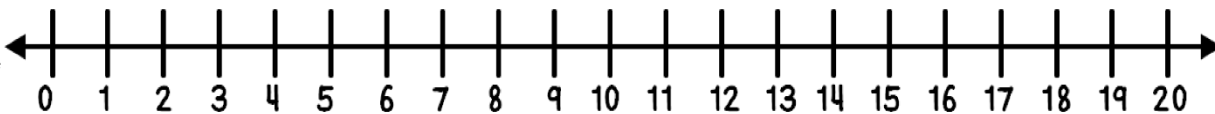
Addition of 3
addends – sums
to 20

I had a birthday party. 3 adults, 9 girls, and 1 boy came to my party. How many total guests came to my party?

Draw a picture to show your thinking.

Show your work using ten frames.

Show your thinking on the number line.



Write a number sentence.

___ O ___ O ___ O ___

What is your final answer?

Name: _____ Date: _____

Addition within
100: 2 digits
and 1 digit – no
regrouping

When I looked out of my hotel window, I saw
34 fish and 5 dolphins in the ocean. How many
total sea animals did I see?

Draw a picture to show your thinking.

Write a number sentence.

___ 0 ___ 0 ___

What is your final answer?