

Dinosaur Number Line Addition & Subtraction Within 10





Credits

Copyright 2014
The Teaching Treehouse

Graphics by

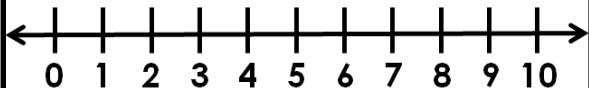
Pixel Paper Prints

Name _____

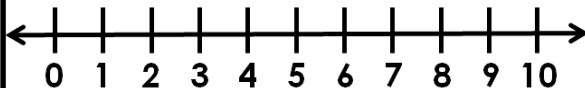
Dinosaur Number Line Addition Within 10



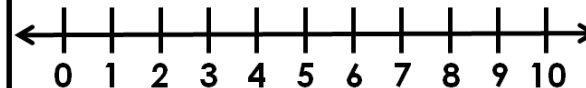
Use the number lines to add. Write the answers in the boxes.



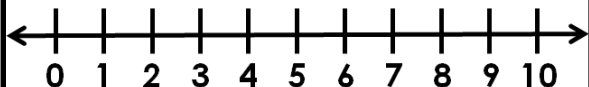
$$2 + 3 = \square$$



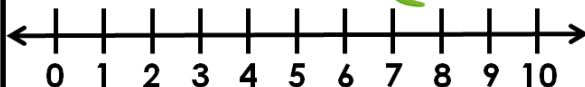
$$4 + 4 = \square$$



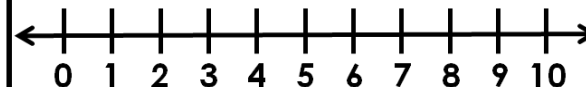
$$1 + 5 = \square$$



$$7 + 2 = \square$$



$$8 + 0 = \square$$



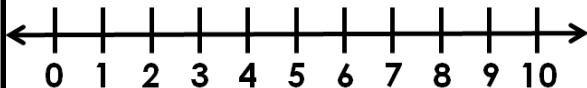
$$9 + 1 = \square$$

Name _____

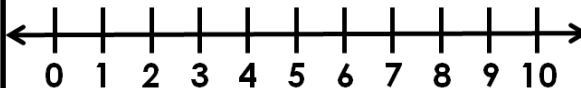
Dinosaur Number Line Addition Within 10



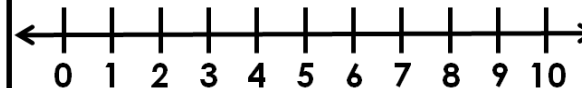
Use the number lines to add. Write the answers in the boxes.



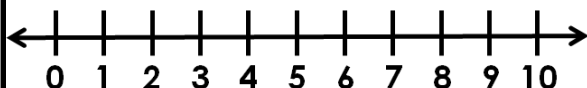
$$6 + 2 = \square$$



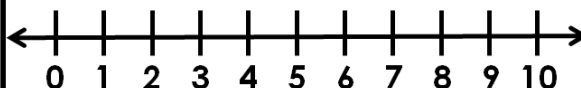
$$3 + 4 = \square$$



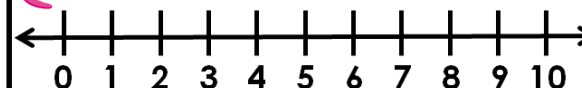
$$7 + 3 = \square$$



$$5 + 5 = \square$$




$$2 + 2 = \square$$



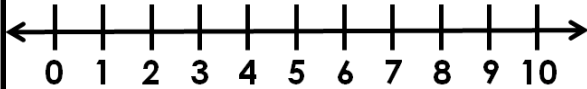
$$0 + 3 = \square$$

Name _____

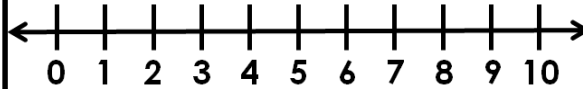
Dinosaur Number Line Subtraction Within 10



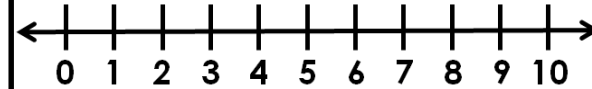
Use the number lines to subtract. Write the answers in the boxes.



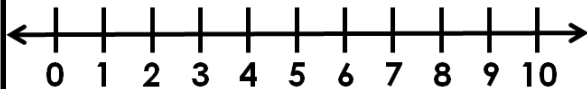
$$7 - 3 =$$



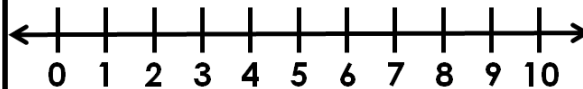
$$4 - 2 =$$



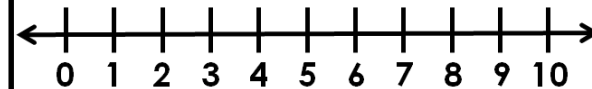
$$2 - 0 =$$



$$9 - 5 =$$



$$3 - 3 =$$



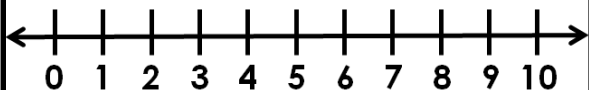
$$8 - 6 =$$

Name _____

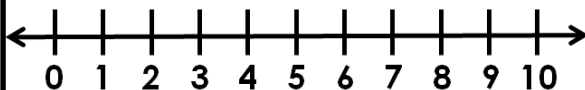
Dinosaur Number Line Subtraction Within 10



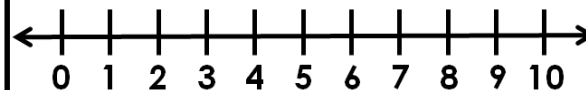
Use the number lines to subtract. Write the answers in the boxes.



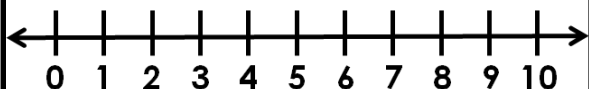
$$5 - 4 =$$



$$6 - 3 =$$



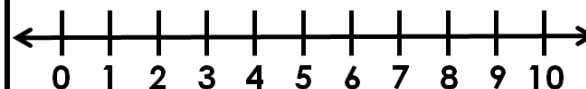
$$8 - 2 =$$



$$10 - 6 =$$



$$4 - 1 =$$



$$9 - 8 =$$